



KINDERGARTEN MATHEMATICS ULTIMATE BUNDLE

FREE SAMPLE

ADD TO 10
Draw more candyballs to make 10. Fill missing number in equation.

 $2 + \square = 10$	 $4 + \square = 10$	 $3 + \square = 10$
 $5 + \square = 10$	 $8 + \square = 10$	 $7 + \square = 10$
 $6 + \square = 10$	 $9 + \square = 10$	 $1 + \square = 10$

COMPLETE THE TABLE

7	X	8	X	9	X
	1		1		1
	2		2		2
	3		3		3
	4		4		4
	5		5		5
	6		6		6
	7		7		7
	8		8		8
	9		9		9
	10		10		10

MULTIPLICATION X6

$2 \times 6 = \square$	$6 \times 6 = \square$
$9 \times 6 = \square$	$1 \times 6 = \square$
$10 \times 6 = \square$	$3 \times 6 = \square$
$5 \times 6 = \square$	$7 \times 6 = \square$
$8 \times 6 = \square$	$4 \times 6 = \square$

SKIP COUNT BY 5

\square	\square	\square	\square	\square	\square	\square	\square	\square	\square
									60

TRACING NUMBERS
Trace and copy the numbers.

41	41	41	41
42	42	42	42
43	43	43	43
44	44	44	44
45	45	45	45

COUNT HOW MANY
Count the number of fingers and write the number.

COMPLETE THE FACT FAMILY

27	64
$3 \times \square$	$8 \times \square$
81	
$9 \times \square$	
12	36
$6 \times \square$	$9 \times \square$

COMPLETE THE TABLE

7	X	8	X	9	X
	1		1		1
	2		2		2
	3		3		3
	4		4		4
	5		5		5
	6		6		6
	7		7		7
	8		8		8
	9		9		9
	10		10		10

NUMBER LINE ADDITION
Use the number line to get the answer.

$7 + 2 = \square$	$1 + \square = \square$
$5 + 4 = \square$	$6 + \square = \square$
$5 + 3 = \square$	$1 + 5 = \square$
$3 + 4 = \square$	$3 + 7 = \square$

300+ Worksheet BUNDLE PACK

NUMBER LINE
Use the number line to get the answer.

$7 + 2 = \square$	$1 + 7 = \square$
$5 + 4 = \square$	$6 + 1 = \square$
	$3 + 4 = \square$

EM

READ IT
Tom has 5 apples. How many apples altogether?

DRAW

ANSWER

COLOR BY ADDITION
Solve the addition facts & Color the image with code.

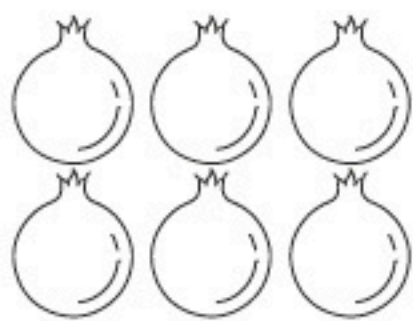
2+2	2+2	2+2	2+2
1+4	2+3	4+1	2+2
3+3	2+3	3+3	6+1

Name : _____


Date : _____

FRUIT PICTURE SUBTRACT

Use pictures to solve addition question.



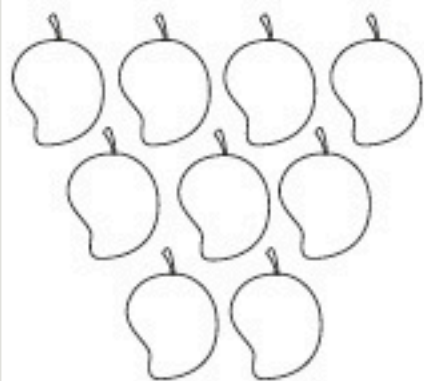
$$6 - 2 = \square$$




$$3 - 2 = \square$$



$$8 - 5 = \square$$




$$9 - 3 = \square$$




$$5 - 2 = \square$$



$$8 - 2 = \square$$



$$5 - 4 = \square$$



$$6 - 1 = \square$$




$$4 - 3 = \square$$

Name : _____

Date : _____

COUNT THE DOTS

Count the number of dots on bug and write the number in the box.

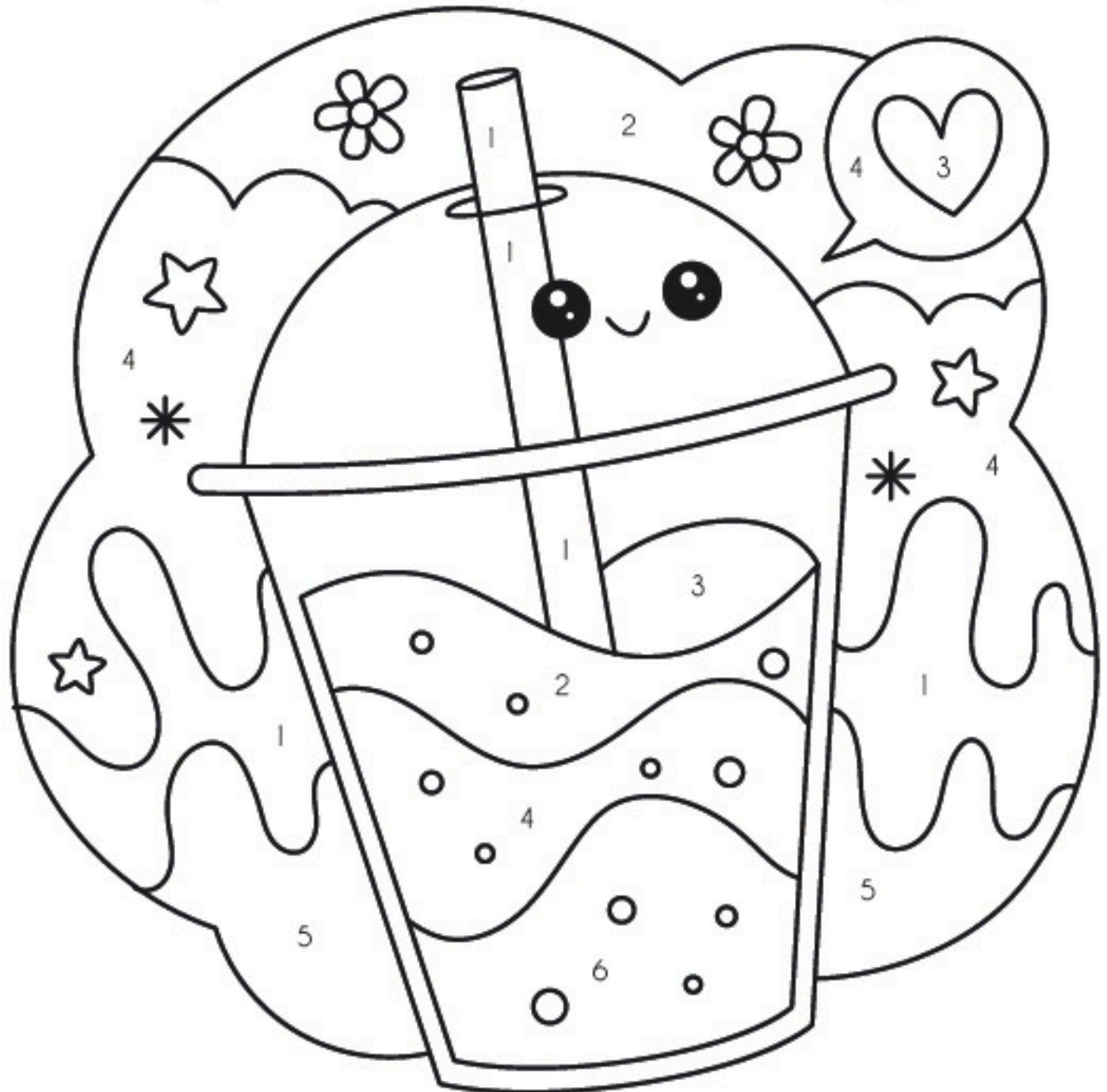


Name : _____

Date : _____

COLOR BY NUMBER

Color the picture as per given number coding.



1 Yellow

2 Pink

3 Red

4 Blue

5 Green

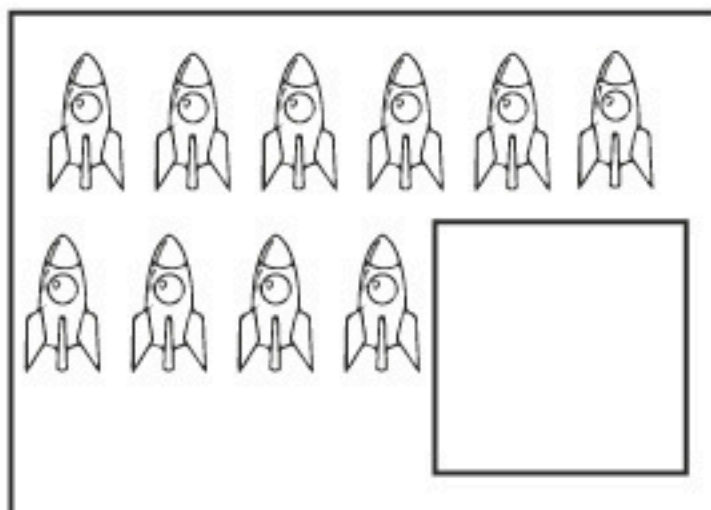
6 Violet

Name : _____

Date : _____


COUNTING OBJECTS

Count the objects and paste the matching number in front of it.



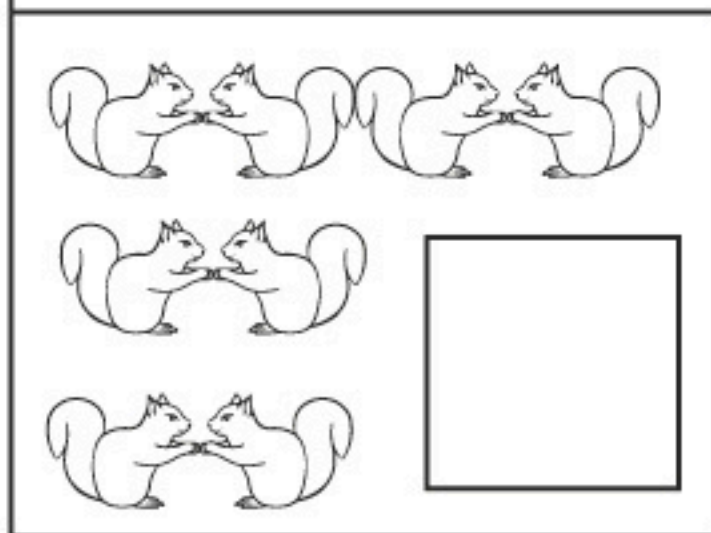
6 rockets

4 rockets



6 ducks


3 ducks



4 squirrels

2 squirrels

2 squirrels



1 sheep

8

10

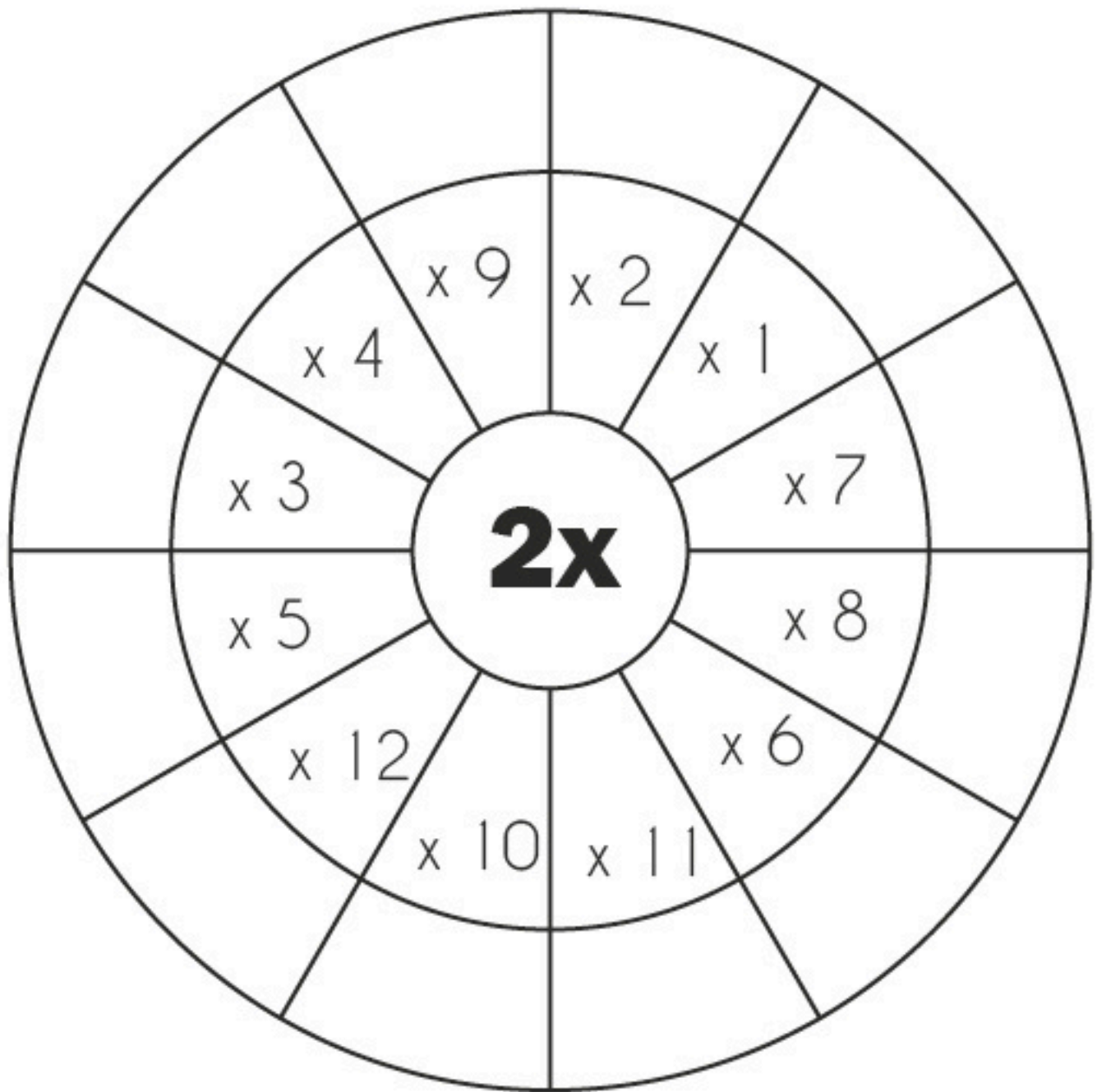
1

9

Name : _____

Date : _____

COMPLETE THE MULTIPLICATION WHEEL



Name : _____

Date : _____

SEARCH THE TEN

Color the addition facts that make 10

$8+1$

$9+1$

$6+4$

$2+7$

$8+2$

$2+8$

$3+7$

$5+5$

$1+9$

$4+5$

$6+6$

$2+9$

$2+6$

$8+1$

$5+4$

$4+5$

$4+6$

Name : _____

Date : _____

COUNT & WRITE

Count the tally marks and write the correct numeral.













Name : _____

Date : _____

WORD PROBLEM

READ > DRAW > ANSWER

READ IT

Sam has 3 apples. Tom has 5 apples. How many apples altogether ?

DRAW

ANSWER

Name : _____

Date : _____

COMPLETE THE TABLE

7	X
	1
	2
	3
	4
	5
	6
	7
	8
	9
	10

8	X
	1
	2
	3
	4
	5
	6
	7
	8
	9
	10

9	X
	1
	2
	3
	4
	5
	6
	7
	8
	9
	10

Name : _____

Date : _____

ROLL AND WRITE

Roll 1 dice, write the numbers in the face and solve the equation.

$10 - \square = \underline{\quad}$

$10 - \square = \underline{\quad}$

$10 - \square = \underline{\quad}$

$10 - \square = \underline{\quad}$

$10 - \square = \underline{\quad}$

$10 - \square = \underline{\quad}$

$10 - \square = \underline{\quad}$

$10 - \square = \underline{\quad}$

$10 - \square = \underline{\quad}$

$10 - \square = \underline{\quad}$

$10 - \square = \underline{\quad}$

$10 - \square = \underline{\quad}$

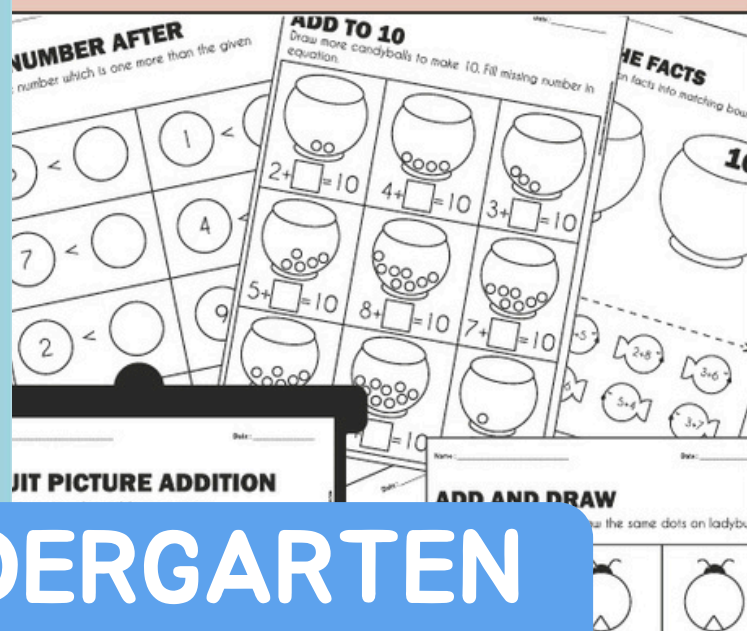


300+ Worksheets to Practice & Learn

GET THE BUNDLE NOW

KINDERGARTEN ADDITION PACKET

KINDERGARTEN LEARNING NUMBERS 1 TO 50



4 IN 1 KINDERGARTEN MATHEMATICS BUNDLE

MULTIPLICATION PACKET

SUBTRACTION PACKET

